



Multiplication and Division Test 4


Name : _____

Score : _____ out of 20




1

$4 \times 7 =$




2

$550 \div 5 =$



3

$828 \times 0 =$



4

$$= 2,050 \times 10$$

5

$$63 \div 7 =$$

6

$$932 \div 4 =$$

7

$$831 \div 1 =$$

8

$$2 \times 4 \times 6 =$$

9

$$5 \times 700 =$$

10

$214 \times 3 =$

11

$7,700 \div 7 =$

12

1.08×100

13

$26 \times 4 =$

14

$643 \times 7 =$

15

$0.357 \times 4 =$

16

$5,236 \div 2 =$

A large grid for working out the division problem. A blue rectangular box is positioned on the right side of the grid, intended for the final answer.

17

$45 \times 0.3 =$

A large grid for working out the multiplication problem. A blue rectangular box is positioned on the right side of the grid, intended for the final answer.

18

$\boxed{} = 400 \times 7$

A large grid for working out the multiplication problem. A blue rectangular box is positioned at the start of the grid, intended for the final answer.

19

$$212 \div 10$$

20

$$1,935 \div 3 =$$