



# Multiplication and Division Test 2

Name : \_\_\_\_\_

Score : \_\_\_\_\_ out of 20



1

$$415 \times 0 =$$

2

$$400 \div 5 =$$

3

$$5 \times 10 \times 12 =$$

4

$$486 \div 9 =$$

5


$$= 512 \div 1$$

6

$$8 \times 6 =$$


7

$$3.15 \div 100 =$$




8

$$48 \div 6 =$$



9

$$3 \times 60 =$$



**10**

$2,050 \times 10 =$

**11**

$672 \times 6 =$

**12**

$1,152 \div 3 =$

**13**

$82 \times 37 =$

**14**


$4,800 \div 60 =$

**15**


$704 \times 56 =$

**16**


$5,103 \times 54 =$

**17**

$12.6 \times 4 =$

**18**

$851 \div 23 =$



19

$$5,413 \div 17 =$$

A large grid for working out the division problem. A blue rectangular box is drawn on the grid, intended for the student to write their answer.

20

$$= 37 \times 0.4$$

A large grid for working out the multiplication problem. A blue rectangular box is drawn on the grid, intended for the student to write their answer.